

The Great Maths Test: Number 5



The Penguin Test

Name: _____

Date: / /

1

$3 + 9 = \boxed{}$



2

$12 - 7 = \boxed{}$



3

$68 + 20 = \boxed{}$



4

$19 - 7 = \boxed{}$



5

$$12 + 7 + 4 = \boxed{}$$



6

$$47 - 9 = \boxed{}$$



7

$$\boxed{} + 9 = 17$$



8

$$35 + 7 = \boxed{}$$



9

$$6 + 5 = 4 + \boxed{}$$




10

$$45 + 26 = \boxed{}$$




11

$$52 - 40 = \boxed{}$$



12

$$60 - \boxed{} = 20$$



13

$3 \times 10 = \boxed{}$



14

$0 \times 9 = \boxed{}$



15

$7 \times 3 = \boxed{}$



16

$14 \div 2 = \boxed{}$



17

$$20 \div 5 =$$



18

$$\frac{1}{4} \text{ of } 24 =$$




19

$$39 + 44 = \boxed{}$$



20

$$86 - 33 = \boxed{}$$



21

$$\frac{1}{2} \text{ of } 34 = \boxed{}$$



22

$$94 - 36 = \boxed{}$$



25

$$\frac{3}{4} \text{ of } 100 = \boxed{}$$



Well done, you've finished!
Here's a picture of a penguin jumping out of the water:

