


Maths Homework

1. This tally chart shows the different colours in a bag of sweets. Fill in the missing boxes:

Colour	Tally	Number
red		4
green		5
orange		
yellow		8
purple		

Which bag shows the sweets in the tally chart?




2. Tick the statements that are correct.


- a. A cylinder has a curved face.
- b. A cylinder has four vertices.
- c. A cylinder has six faces.
- d. A cylinder has two circular faces.

3. This arrow has been rotated clockwise. How far has the arrow been rotated?

Starting position



New position



- 1. Quarter turn
- 2. Half turn
- 3. Three-quarter turn
- 4. Full turn

4. Bruno the dog has 23 biscuits in his treat box. His owner gives him 8.
How many biscuits are left in the box?

5. Put these jugs in order from least full to most full.

Least full

1. _____

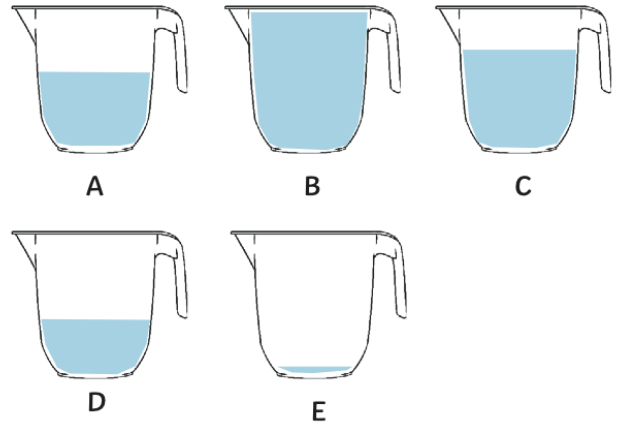
2. _____

3. _____

4. _____

5. _____

Most full



6. Fill in the missing numbers to make 57.

50 + _____

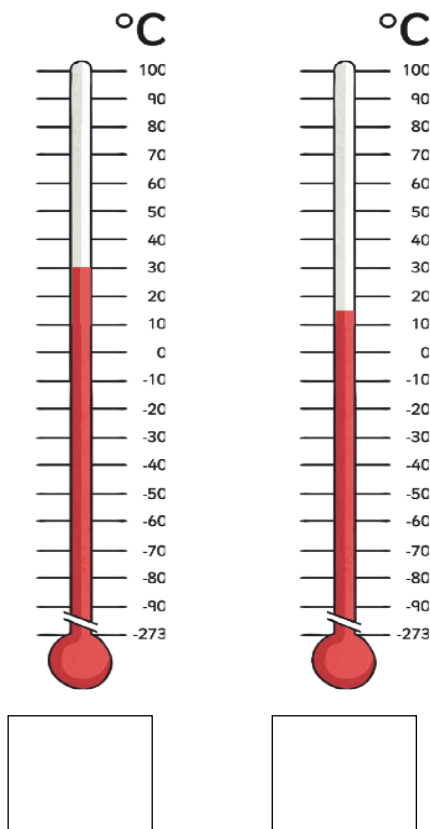
40 + _____

30 + _____

_____ + 37

10 + _____

7. What is the temperature on the thermometers below?



Arithmetic

$$\square = 45 + 32$$

$$52 - \square = 37$$

$$30 + 7 + 6 = \square$$

$$4 \times \square = 16$$

$$28 + \square = 35$$

$$20 \div 2 = \square$$

$$\frac{1}{2} \text{ of } 24 = \square$$

$$\frac{1}{4} \text{ of } 16 = \square$$

$$\frac{3}{4} \text{ of } 16 = \square$$