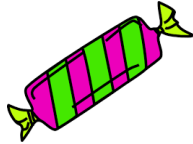


Jack has 2 sweets and Jim has double.

How many sweets does Jim have?



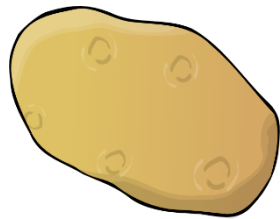
Nick had 8 apples yesterday but now half has been eaten.

How many apples does Nick have now?



Emma has 5 potatoes but she needs double for her recipe.

How many potatoes does Emma need?




Amy has 6 ants. Matt has half the amount.

How many ants does Matt have?




Jenny saw 3 ducks at the pond.  
Yesterday she saw double that amount.  
How many did she see yesterday?



Jane made 10 cupcakes and Lisa  
took half to school.  
How many did Lisa take to school?



Philip has 6 pencils. Simon has  
double that amount.  
How many pencils does Simon have?



Jess has 8 cocoa beans. Nick has  
half this amount.  
How many cocoa beans does Nick  
have?

